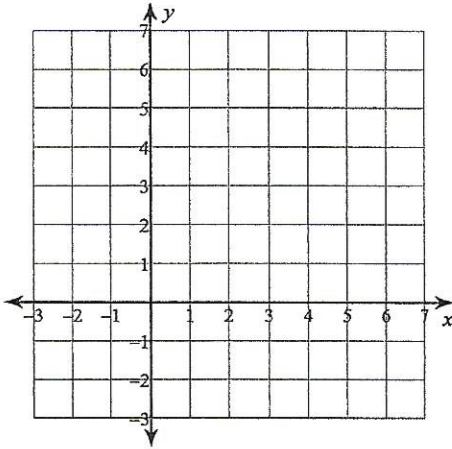
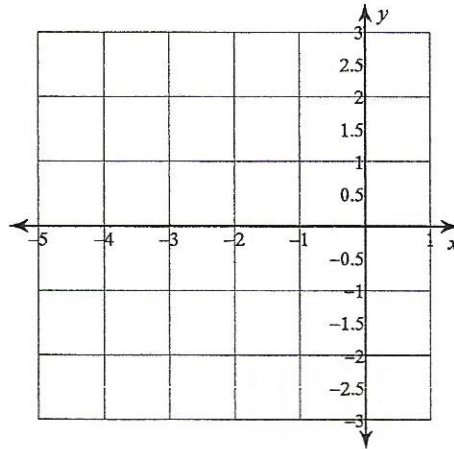


Sketch the graph of each function.

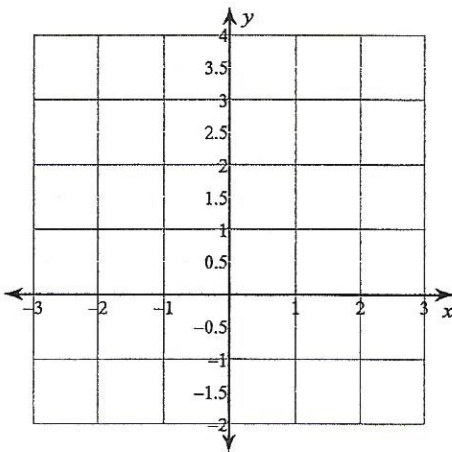
5) $y = 2x^2 - 12x + 16$



6) $y = x^2 + 6x + 7$



7) $y = -x^2 - 2x + 2$



8) $y = -2x^2 - 16x - 33$

