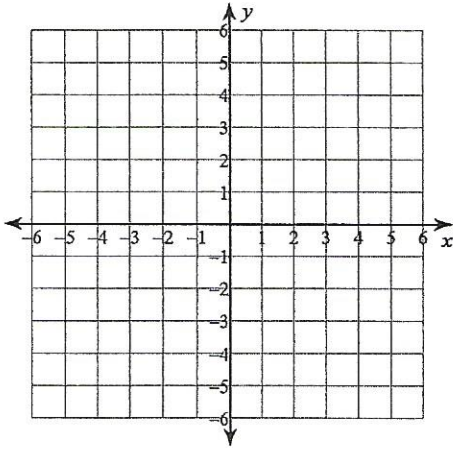


Quadratics & Absolute Values

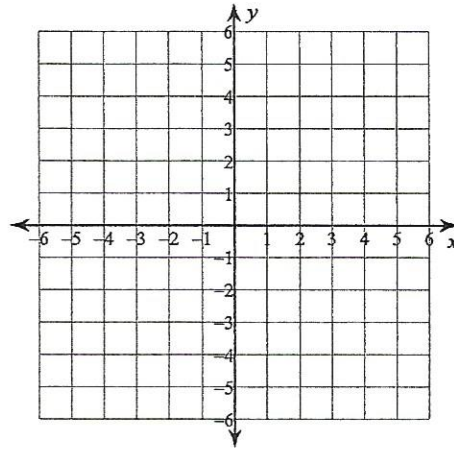
9/15/2014 _____ Period _____

Graph each equation. Find the domain, range and max. or min.

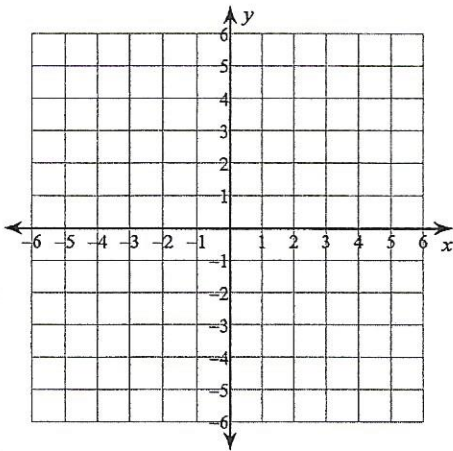
1) $y = -|x| + 4$



2) $y = |x| - 3$



3) $y = |x + 3|$



4) $y = -|x - 2| + 4$

